



THE OFAH | MARIO CORTELLUCCI  
**HUNTING & FISHING**  
Heritage Centre

705-748-6324, ext. 100 | info@hfhc.ca

[www.hfhc.ca](http://www.hfhc.ca)



**All Grades**

# WHICH ICE IS SAFEST?

Technically, no ice is perfectly safe ice. If you watched our video on Ice Fishing you have learned about ice and ice safety. Look at the images below and examine the locations to determine where the safest place is to ice fish in each scenario. Circle the letter which shows the safest fishing spot.

1.

**A**      **B**      **C**

**A**      **B**      **C**

2.

**A**      **B**      **C**

**A**      **B**      **C**

3.

**A**      **B**      **C**

**A**      **B**      **C**

4.

**A**      **B**      **C**

**A**      **B**      **C**





THE OFAH | MARIO CORTELLUCCI  
**HUNTING & FISHING**  
Heritage Centre

705-748-6324, ext. 100 | info@hfhc.ca

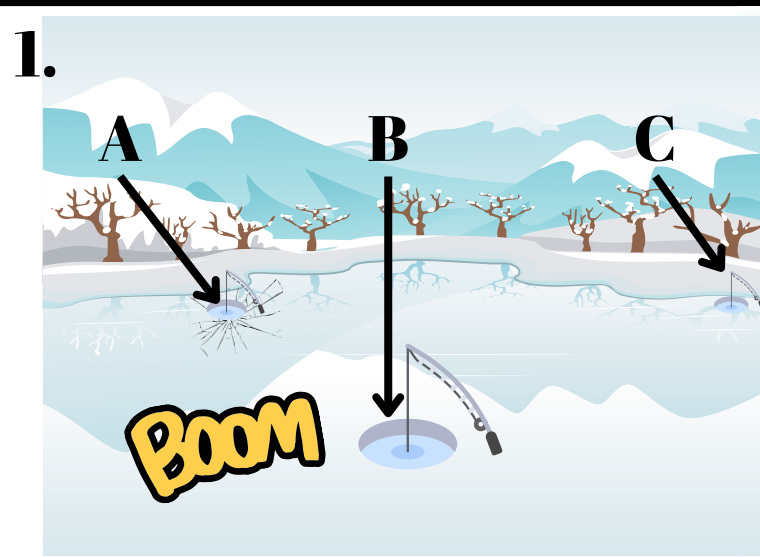
[www.hfhc.ca](http://www.hfhc.ca)



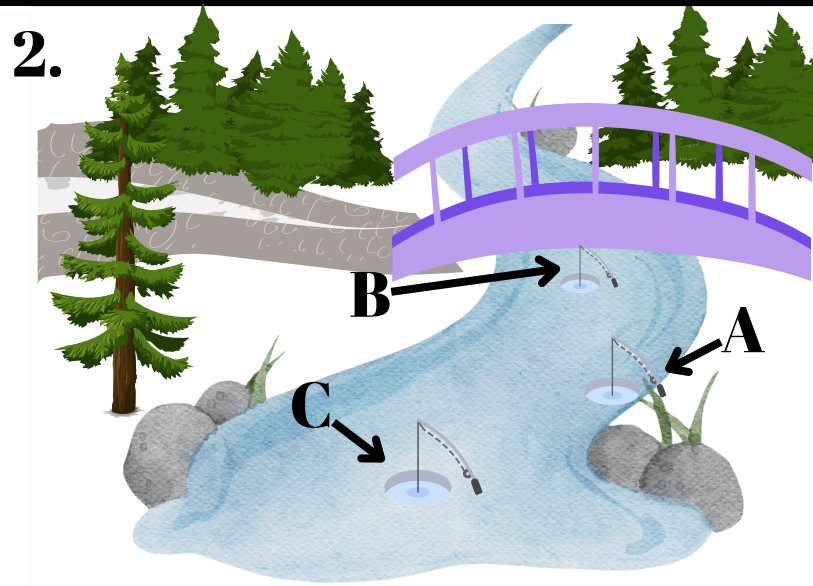
All Grades

# WHICH ICE IS SAFEST?


Technically, no ice is perfectly safe ice. If you watched our video on Ice Fishing you have learned a little bit about ice safety. Look at the images below and examine the locations to determine where the safest place is to ice fish in each scenario. Circle the letter which shows the safest fishing spot.




A    **B**    C



A    B    **C**



**A**    B    C



A    B    **C**

**ANSWER KEY**



THE OFAH | MARIO CORTELLUCCI

**HUNTING & FISHING**  
Heritage Centre

705-748-6324, ext. 100 | info@hfhc.ca

[www.hfhc.ca](http://www.hfhc.ca)



# WHICH ICE IS SAFEST? PART 2



All Grades

Now that you have identified the safest spot to fish in each scenario, write down which letter you chose and write an explanation for why you think that is the safest spot.

**1.**

---

---

---

---

---

---

---

---

---

---

**2.**

---

---

---

---

---

---

---

---

---

---

**3.**

---

---

---

---

---

---

---

---

---

---

**4.**

---

---

---

---

---

---

---

---

---

---



All Grades

# WHICH ICE IS SAFEST? PART 2

Now that you have identified the safest spot to fish in each scenario, write down which letter you chose and write an explanation for why you think that is the safest spot.

1. Hole 'A' is near cracking ice while hole 'C' is too close to shore. At hole 'B' there is a booming sound, but this hole is the safest, in the middle.

2. Hole 'A' is on the outside bend in the river, while hole 'B' is under the bridge which is not safe ice. Hole 'C' is safest, being in the middle and away from shore.

**ANSWER KEY**

3. Hole 'B' is near cracking ice while hole 'C' is too close to shore. Hole 'A' is the safest, in the middle.

4. Hole 'A' is on the outside bend in the river, which could be unsafe due to current. while hole 'B' appears to be near open water. Hole 'C' is safest, being in the middle and away from shore.






\_\_\_\_\_

(name)

### Matching Game




### Word Search

M	H	B	A	I	T	S	P	A	A	I	B
M	I	T	T	E	N	S	F	P	U	C	T
X	C	S	N	A	C	K	S	G	G	E	I
H	E	A	T	E	R	K	I	C	E	H	P
P	F	I	S	H	I	N	G	W	R	U	U
L	S	N	O	W	P	A	N	T	S	T	P
Y	E	L	L	O	W	P	E	R	C	H	C
O	I	C	E	P	I	C	K	S	I	E	X

AUGER BAIT    FISHING HEATER    ICE HUT    ICE PICKS    MITTENS    SNACKS    TIP-UP    YELLOW PERCH

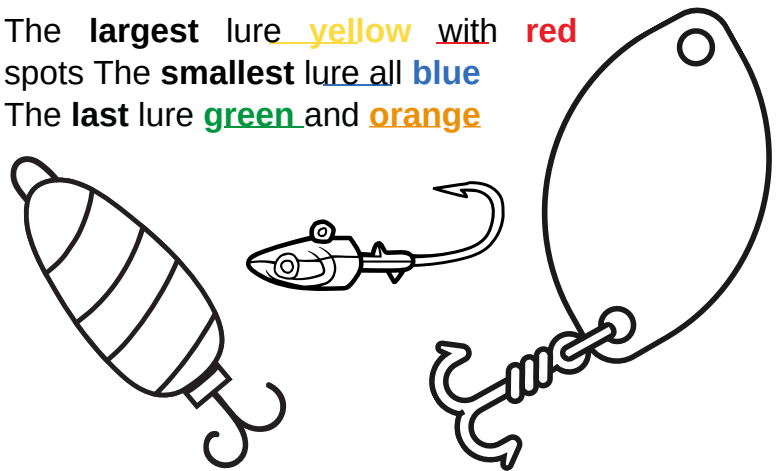
**Bonus:** SNOWPANTS

### Maze



### Colour

The **largest** lure yellow with **red** spots  
 The **smallest** lure all **blue**  
 The **last** lure **green** and **orange**



### A reel-ly fishy joke!

How do you communicate with a fish?

Answer: You just have to drop it a line.

